

Name: _____

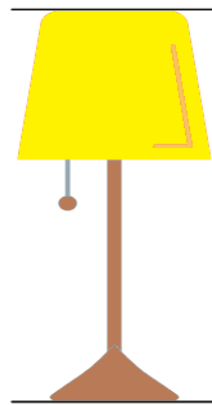
Class: _____

Measuring objects:



Count and color the number of blocks to show the height of the object.



The scissor is _____ blocks tall.



The lamp is _____ blocks tall.



The ruler is _____ blocks tall.



The flower is _____ blocks tall.