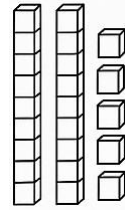


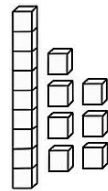
Matching Tens and Ones

Match tens and ones to the correct blocks.

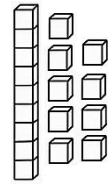
1 tens + 3 ones



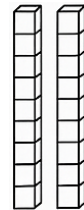
2 tens + 0 ones



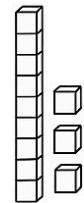
1 tens + 7 ones



2 tens + 5 ones



2 tens + 8 ones



1 tens + 9 ones

