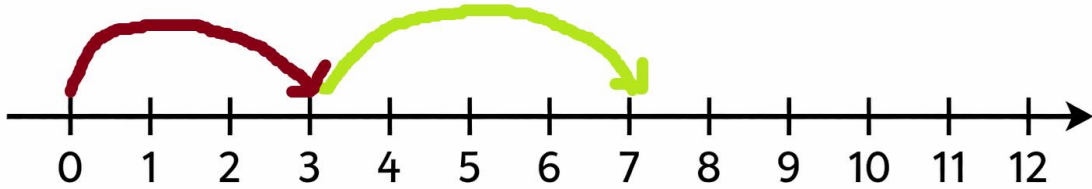
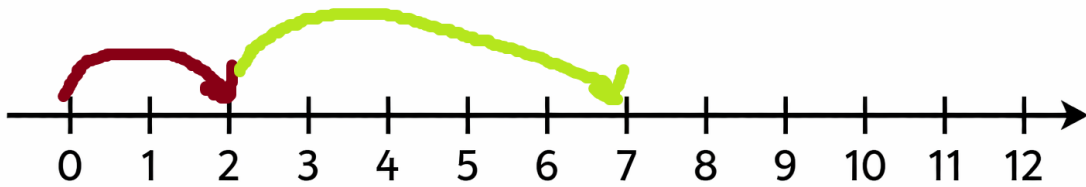


Addition Using Number Line

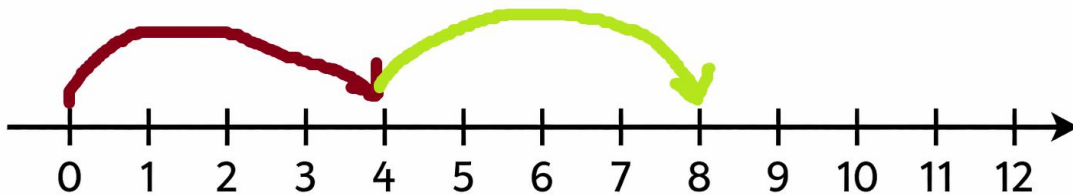
Look at the number line with jumps. Fill in the missing numbers in the boxes.



$$\boxed{3} + \boxed{4} = \boxed{}$$



$$\boxed{} + \boxed{5} = \boxed{7}$$



$$\boxed{4} + \boxed{} = \boxed{8}$$



$$\boxed{7} + \boxed{} = \boxed{10}$$