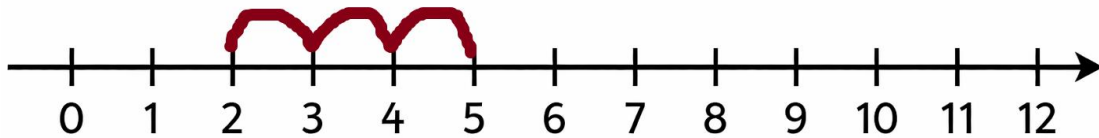
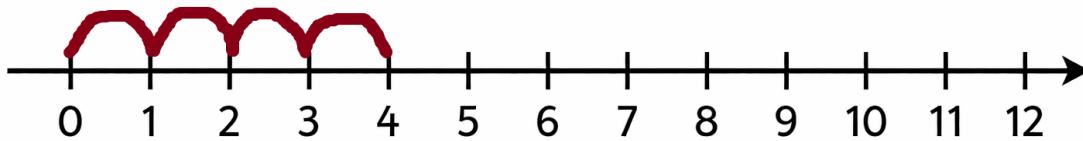


Addition Using Number Line

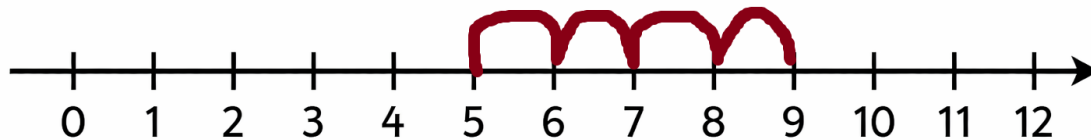
Look at the number line. Fill in the missing numbers in the boxes. Also complete the missing jumps on the number line.



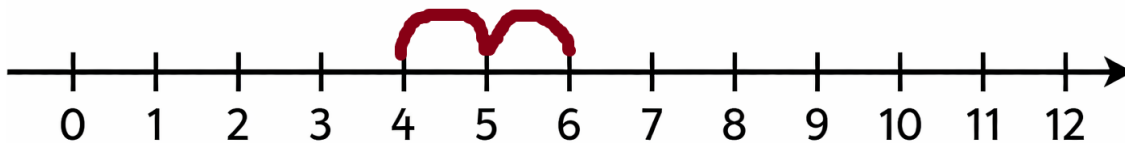
$$\boxed{} + \boxed{3} = \boxed{5}$$



$$\boxed{4} + \boxed{} = \boxed{8}$$



$$\boxed{} + \boxed{4} = \boxed{9}$$



$$\boxed{} + \boxed{2} = \boxed{6}$$