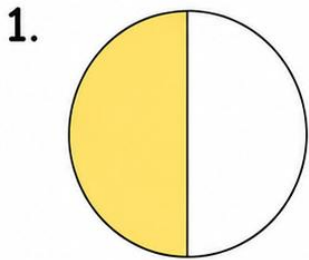


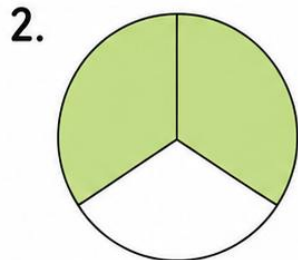
# Fractions

A fraction shows a part of a whole. The top number tells how many parts we have. The bottom number tells how many equal parts the whole is divided into.

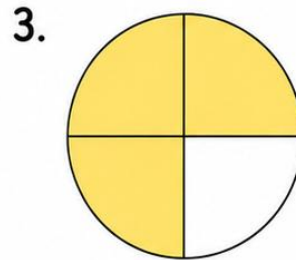
Look at each picture. Choose the correct fraction.



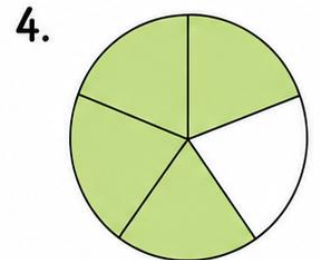
$\frac{1}{2}$     $\frac{2}{2}$



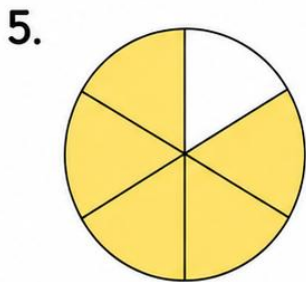
$\frac{2}{3}$     $\frac{1}{3}$



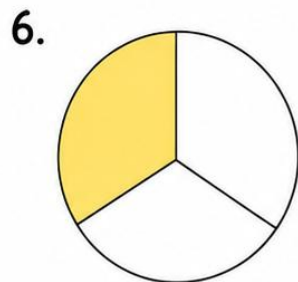
$\frac{3}{4}$     $\frac{1}{4}$



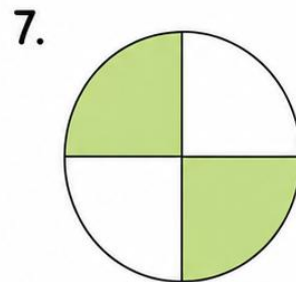
$\frac{4}{5}$     $\frac{3}{5}$



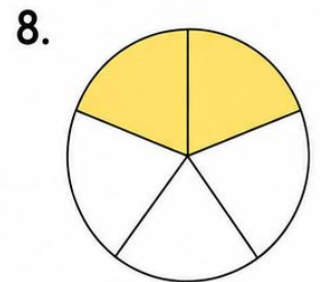
$\frac{5}{6}$     $\frac{1}{6}$



$\frac{1}{3}$     $\frac{2}{3}$



$\frac{2}{4}$     $\frac{3}{4}$



$\frac{2}{5}$     $\frac{3}{5}$