

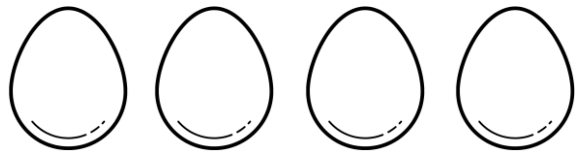
Name: _____

Class: _____

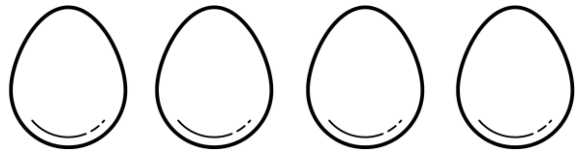
Ascending order:

Write the numbers from least to greatest.

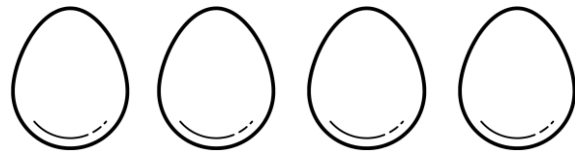
30, 40, 20, 50



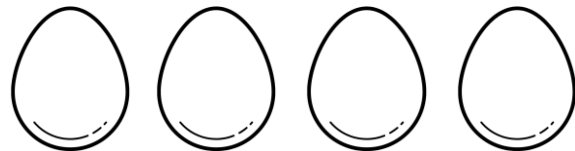
22, 45, 11, 37



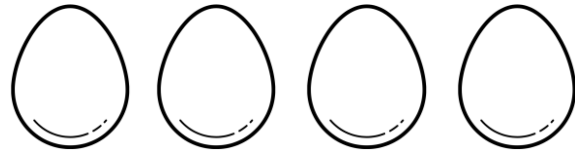
90, 45, 55, 60



70, 35, 25, 88



78, 19, 38, 46



24, 34, 16, 53

