

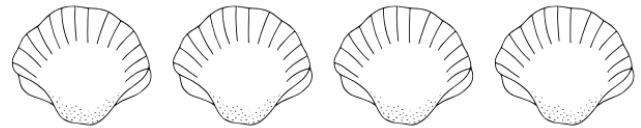
Name: \_\_\_\_\_

Class: \_\_\_\_\_

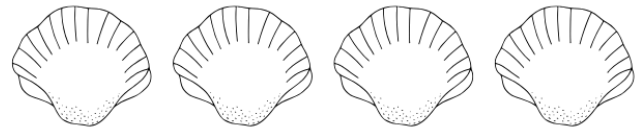
## Ascending order:

Write the numbers from least to greatest.

19, 18, 21, 17



22, 12, 24, 25



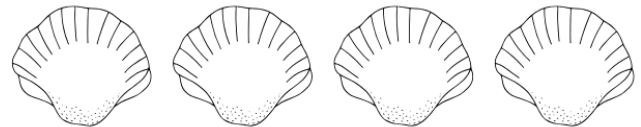
16, 34, 21, 13



12, 20, 34, 22



37, 28, 15, 13



14, 29, 36, 11

