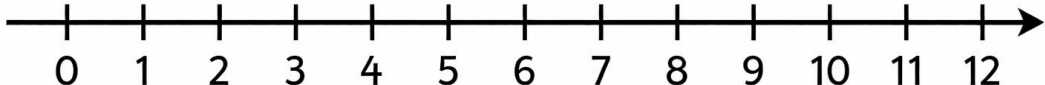
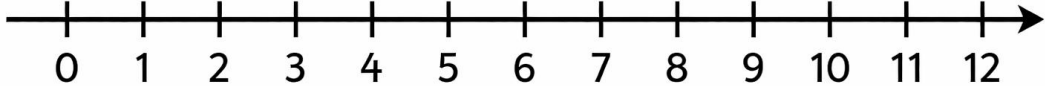
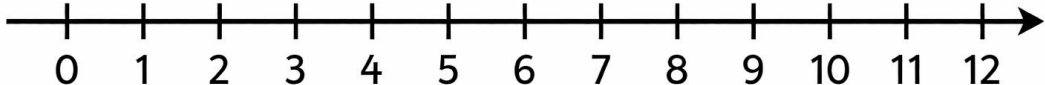


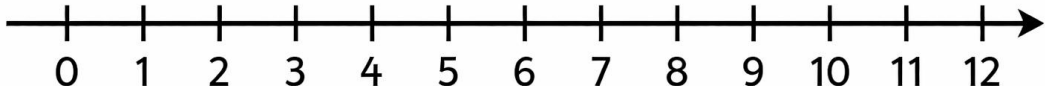
Addition Using Number Line

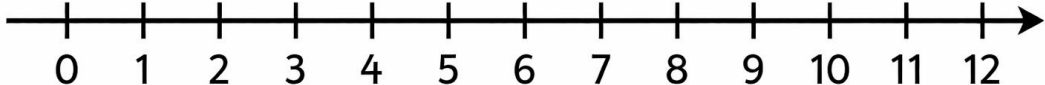
Look at the number line. Draw jumps on the number line to find the answer.

$7 + 1 = \square$ A horizontal number line with arrows at both ends, labeled with integers from 0 to 12. Tick marks are placed at every integer.

$9 + 1 = \square$ A horizontal number line with arrows at both ends, labeled with integers from 0 to 12. Tick marks are placed at every integer.

$4 + 4 = \square$ A horizontal number line with arrows at both ends, labeled with integers from 0 to 12. Tick marks are placed at every integer.

$5 + 4 = \square$ A horizontal number line with arrows at both ends, labeled with integers from 0 to 12. Tick marks are placed at every integer.

$6 + 2 = \square$ A horizontal number line with arrows at both ends, labeled with integers from 0 to 12. Tick marks are placed at every integer.