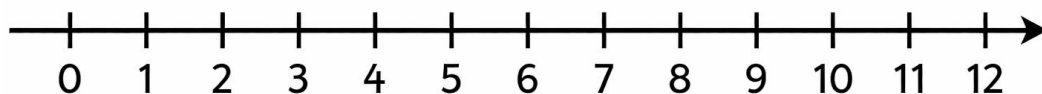


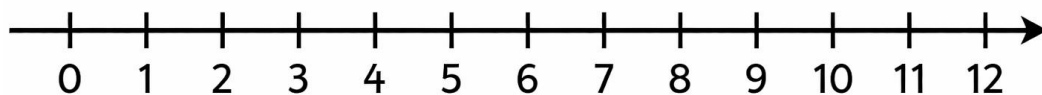
Addition Using Number Line

Look at the number line. Draw jumps on the number line to find the answer.

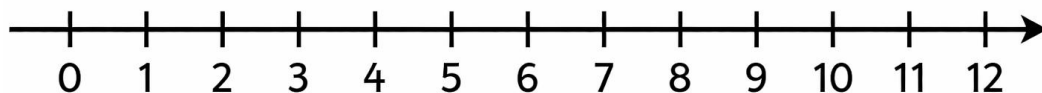
$1 + 1 = \square$



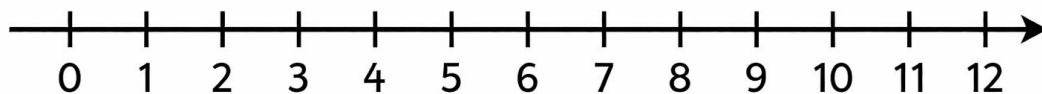
$2 + 1 = \square$



$3 + 1 = \square$



$5 + 1 = \square$



$6 + 1 = \square$

